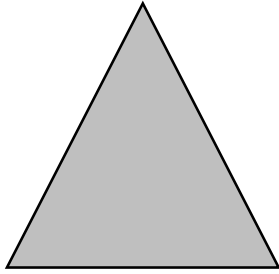


Name _____

Everyday Math for 2nd Grade
Home Link Companion 8.1

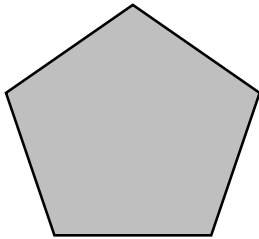
Examine each shape. Record the attributes below.




_____ sides
_____ angles
_____ vertices



_____ sides
_____ angles
_____ vertices



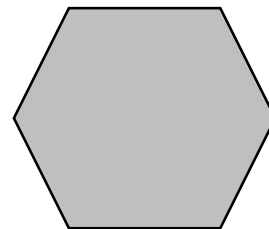
_____ sides
_____ angles
_____ vertices



_____ sides
_____ angles
_____ vertices



_____ sides
_____ angles
_____ vertices



_____ sides
_____ angles
_____ vertices

Name _____

Everyday Math for 2nd Grade
Home Link Companion 8.3

Draw a 4 sided polygon.	Draw a 5 sided polygon.	Draw a 6 sided polygon.
-------------------------	-------------------------	-------------------------

Match the prefix with the meaning.

_____ PENTAgon

_____ HEXAgon

_____ OCTAgon

_____ POLYgon

_____ TRIangle

a. 3 sided shape

b. 5 sided shape

c. Shape with many sides

d. 8 sided shape

e. 6 sided shape

Use base-10 blocks to represent the following numbers

596	827	638
-----	-----	-----